

Percentages of Amounts

Which of these amounts would you rather have? Calculate the amount in each choice and then circle the largest amount.

1. Would you rather...? 25% of £8 50% of £6 20% of £10

2. Would you rather...? 10% of £20 25% of £20 50% of £16

3. Would you rather...? 20% of £55 75% of £20 25% of £40

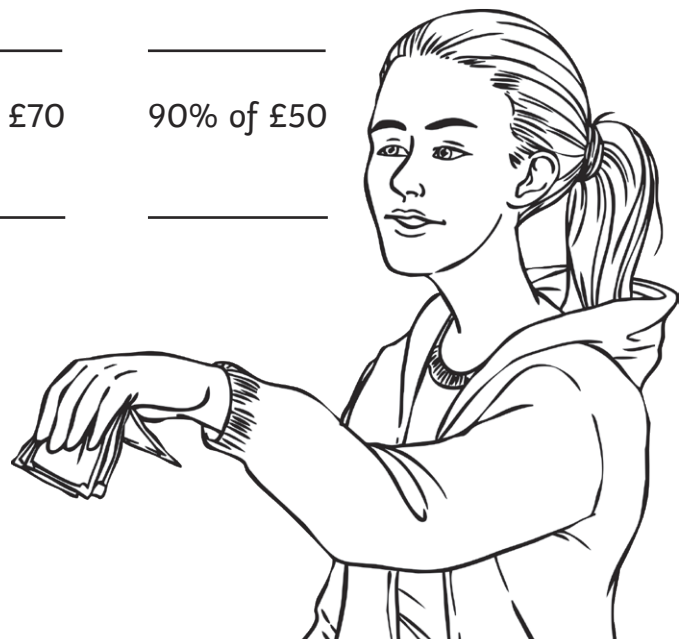
4. Would you rather...? 40% of £35 10% of £100 50% of £30

5. Would you rather...? 80% of £25 50% of £36 30% of £60

6. Would you rather...? 50% of £50 75% of £44 30% of £100

7. Would you rather...? 30% of £80 55% of £60 70% of £50

8. Would you rather...? 85% of £60 80% of £70 90% of £50



Percentages of Amounts Answers

1. Would you rather...?	25% of £8 £2	50% of £6 £3	20% of £10 £2
2. Would you rather...?	10% of £20 £2	25% of £20 £5	50% of £16 £8
3. Would you rather...?	20% of £55 £11	75% of £20 £15	25% of £40 £10
4. Would you rather...?	40% of £35 £14	10% of £100 £10	50% of £30 £15
5. Would you rather...?	80% of £25 £20	50% of £36 £18	30% of £60 £18
6. Would you rather...?	50% of £50 £25	75% of £44 £33	30% of £100 £30
7. Would you rather...?	30% of £80 £24	55% of £60 £33	70% of £50 £35
8. Would you rather...?	85% of £60 £51	80% of £70 £56	90% of £50 £45

Percentages of Amounts

Which of these amounts would you rather have? Calculate the amount in each choice and then circle the largest amount.

1. Would you rather...? 75% of £48 60% of £50 80% of £40

2. Would you rather...? 25% of £52 15% of £60 85% of £20

3. Would you rather...? 50% of £1 75% of £2 25% of £4


4. Would you rather...? 25% of £2 20% of £3 10% of £5

5. Would you rather...? 50% of £5 75% of £3 80% of £4

6. Would you rather...? 15% of £50 40% of £20 50% of £15

7. Would you rather...? 5% of £100 35% of £10 80% of £5

8. Would you rather...? 30% of £60 80% of £25 90% of £25



Percentages of Amounts Answers

1. Would you rather...?

75% of £48

£36

60% of £50

£30

80% of £40

£32

2. Would you rather...?

25% of £52

£13

15% of £60

£9

85% of £20

£17

3. Would you rather...?

50% of £1

£0.50

75% of £2

£1.50

25% of £4

£1

4. Would you rather...?

25% of £2

£0.50

20% of £3

£0.60

10% of £5

£0.50

5. Would you rather...?

50% of £5

£2.50

75% of £3

£2.25

80% of £4

£3.20

6. Would you rather...?

15% of £50

£7.50

40% of £20

£8

50% of £15

£7.50

7. Would you rather...?

5% of £100

£5

35% of £10

£3.50

80% of £5

£4

8. Would you rather...?

30% of £60

£18

80% of £25

£20

90% of £25

£22.50

Percentages of Amounts

Which of these amounts would you rather have? Calculate the amount in each choice and then circle the largest amount.

1. Would you rather...? 15% of £40 10% of £50 20% of £35

2. Would you rather...? 5% of £80 12% of £25 22% of £10

3. Would you rather...? 72% of £1 46% of £2 12% of £5


4. Would you rather...? 11% of £20 24% of £15 42% of £10

5. Would you rather...? 92% of £3 44% of £8 71% of £5

6. Would you rather...? 6% of £70 8% of £50 4% of £80

7. Would you rather...? 11% of £90 22% of £40 33% of £20

8. Would you rather...? 8% of £50 14% of £25 32% of £10



Percentages of Amounts **Answers**

1. Would you rather...?	15% of £40 £6	10% of £50 £5	20% of £35 £7
2. Would you rather...?	5% of £80 £4	12% of £25 £3	22% of £10 £2.20
3. Would you rather...?	72% of £1 £0.72	46% of £2 £0.92	12% of £5 £0.60
4. Would you rather...?	11% of £20 £2.20	24% of £15 £3.60	42% of £10 £4.20
5. Would you rather...?	92% of £3 £2.76	44% of £8 £3.52	71% of £5 £3.55
6. Would you rather...?	6% of £70 £4.20	8% of £50 £4	4% of £80 £3.20
7. Would you rather...?	11% of £90 £9.90	22% of £40 £8.80	33% of £20 £6.60
8. Would you rather...?	8% of £50 £4.00	14% of £25 £3.50	32% of £10 £3.20